

Closing Tues: 14.1
Closing Thur: 14.3(1), 14.3(2)
Closing *next* Tues: 14.4, 14.7

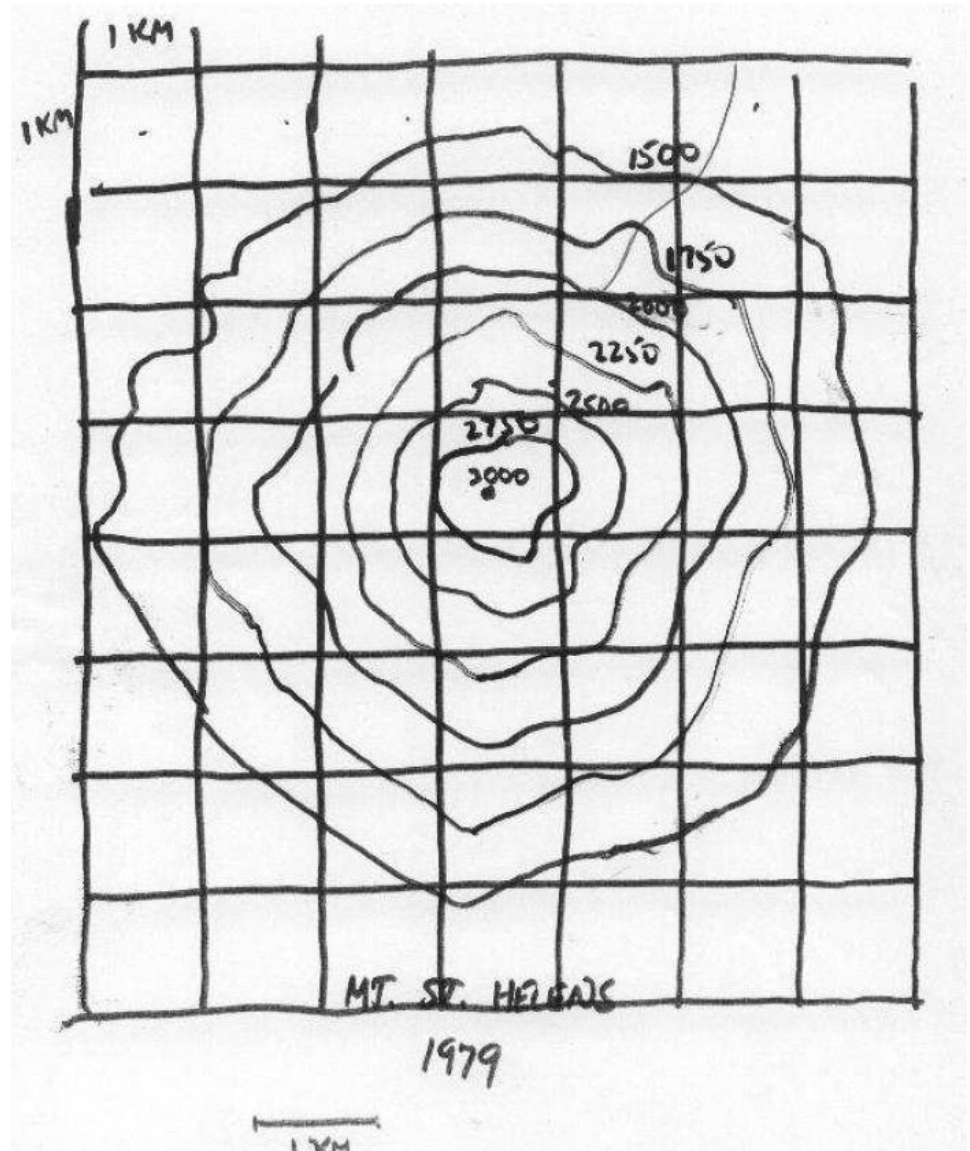
14.1/14.3 Visualizing Surfaces and Partial Derivatives

The basic tool for visualizing surfaces is **traces**.

When $z = f(x, y)$ and we fix z -values (heights), we call these traces **level curves**.

A collection of level curves is called a **contour map** (or **elevation map**).

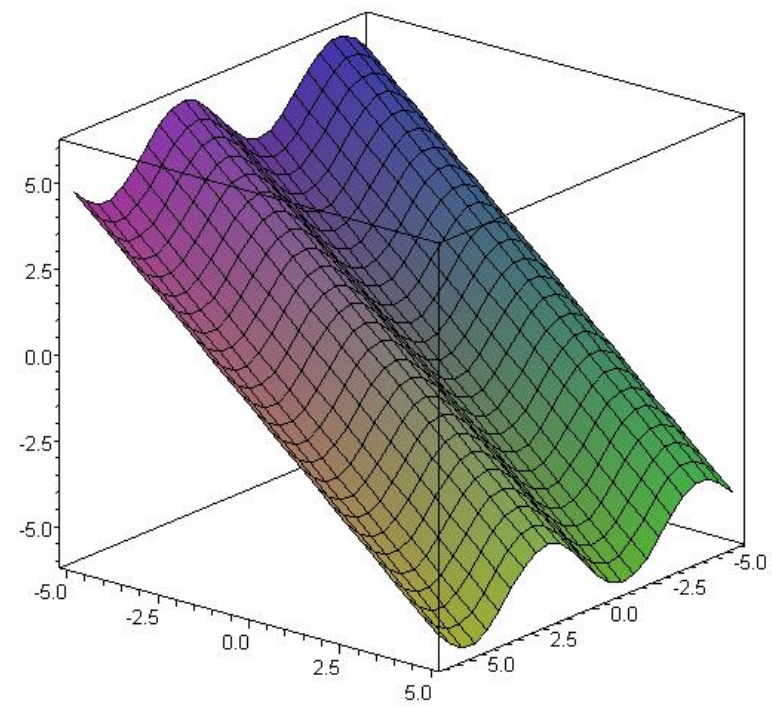
Contour Map (Elevation Map) of Mt. St. Helens from 1979:



Example: Draw a contour map for

$$z = f(x, y) = y - x$$

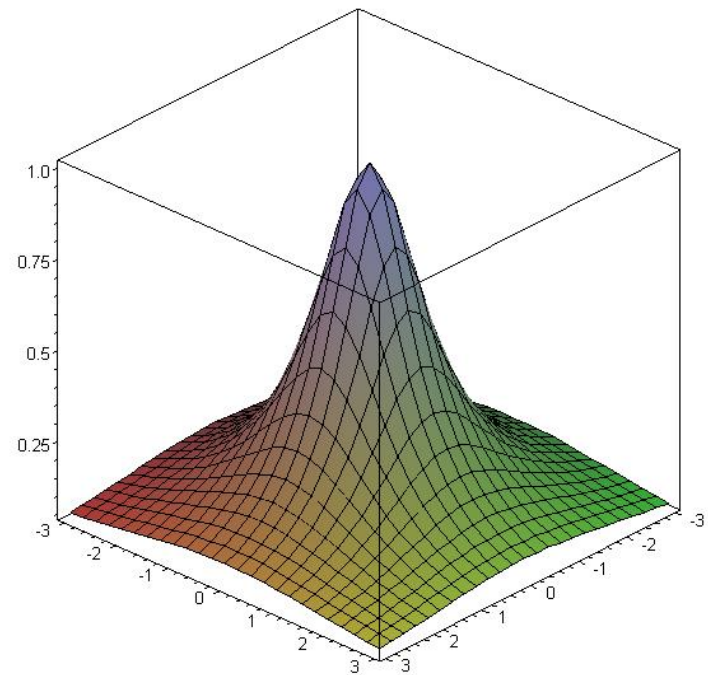
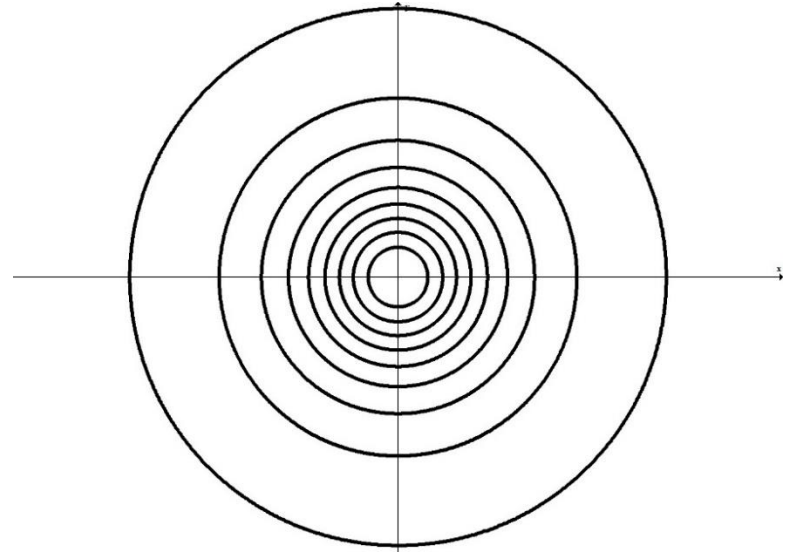
Example: Draw a contour map for
 $z = \sin(x) - y$



Example: Draw a contour map for

$$z = f(x, y) = \frac{1}{1 + x^2 + y^2}$$

(use $z = 1/10, 2/10, \dots, 9/10, 10/10$)

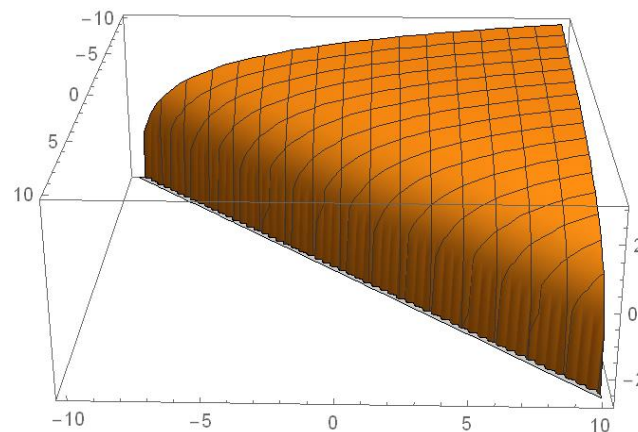


A question that asks “find the *domain*” is asking if you know your functions well enough to understand when they are defined and not defined.

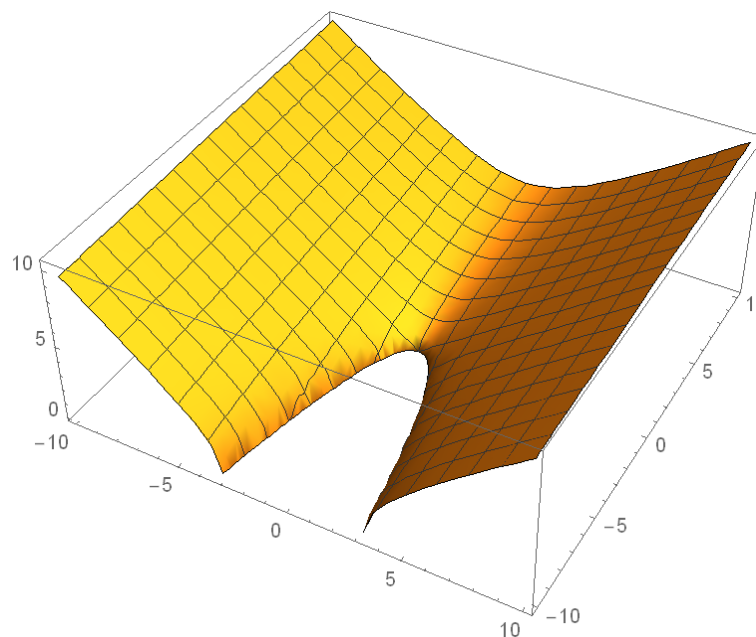
<i>Appears in Function</i>	<i>Restriction</i>
\sqrt{BLAH}	$BLAH \geq 0$
STUFF/BLAH	$BLAH \neq 0$
$\ln(BLAH)$	$BLAH > 0$
$\sin^{-1}(BLAH)$	$-1 \leq BLAH \leq 1$
and other trig...	

Examples: Sketch the domain of

(1) $f(x, y) = \ln(y - x)$



(2) $g(x, y) = \sqrt{y + x^2}$



14.3 Partial Derivatives

Goal: Get the slope in two different directions on a surface.

Recall the key def'n for all calculus

$$f'(x) = \lim_{h \rightarrow 0} \frac{f(x+h) - f(x)}{h}$$

Today we define:

$$\frac{\partial z}{\partial x} = f_x(x, y) = \lim_{h \rightarrow 0} \frac{f(x+h, y) - f(x, y)}{h}$$

$$\frac{\partial z}{\partial y} = f_y(x, y) = \lim_{h \rightarrow 0} \frac{f(x, y+h) - f(x, y)}{h}$$

Motivation: Consider

$$f(x, y) = x^2y + 5x^3 + y^2$$

Find

a. $\frac{d}{dx} [f(x, 2)] = \frac{d}{dx} [x^2(2) + 5x^3 + (2)^2]$

b. $\frac{d}{dx} [f(x, 3)] = \frac{d}{dx} [x^2(3) + 5x^3 + (3)^2]$

c. $\frac{d}{dx} [f(x, c)] = \frac{d}{dx} [x^2(c) + 5x^3 + (c)^2]$

Example:

$$f(x, y) = x^3y + x^5e^{xy^2} + \ln(y)$$

Example:

$$g(x, y) = \cos(x^3 + y^4)$$

Important Note on Variables

A variable can be treated as:

1. A constant
2. An independent variable (input)
3. A dependent variable (output),

Examples:

a) **One variable function of x :**

$$y = x^2$$
$$\frac{dy}{dx} =$$

b) **Related rates:**

At time t assume a particle is moving along the path $y = x^2$.

$$\frac{dy}{dt} =$$

c) **Implicit functions:** $x^2 + y^2 = 1$

$$\frac{dy}{dx} =$$

d) **Multivariable:**

$$z = x^2 + y^3 e^{6y} - 5xy^4$$

$$\frac{\partial z}{\partial x} =$$

$$\frac{\partial z}{\partial y} =$$

e) **Multivariable Implicit:**

$$x^2 + y^2 - z^2 = 1$$

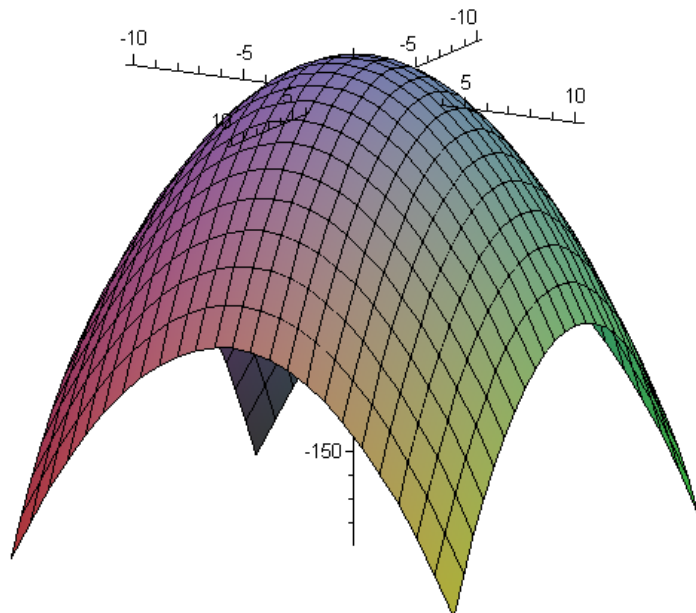
$$\frac{\partial z}{\partial x} =$$

$$\frac{\partial z}{\partial y} =$$

Graphical Interpretation:

Pretend you are skiing on the surface

$$z = f(x, y) = 15 - x^2 - y^2.$$



Exercises:

1. Find $f_x(x, y)$ and $f_y(x, y)$

2. Assume you are standing on the point on the surface corresponding to $(x, y) = (4, 7)$.

Compute:

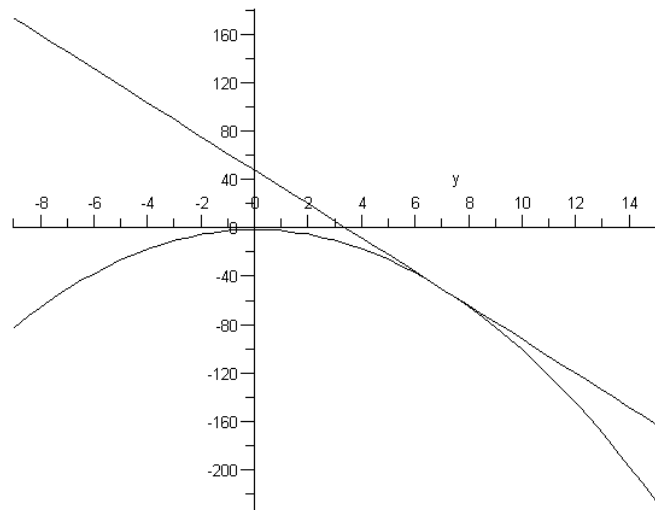
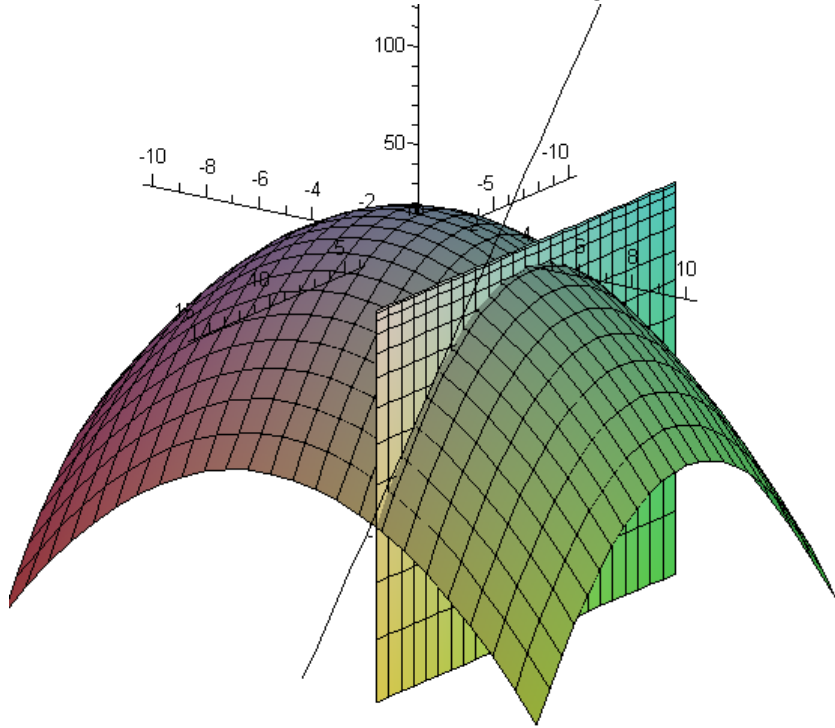
i) $f(4, 7) =$

ii) $f_x(4, 7) =$

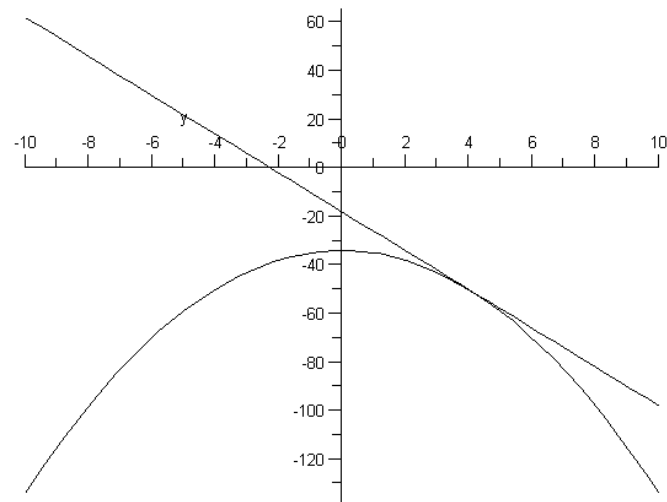
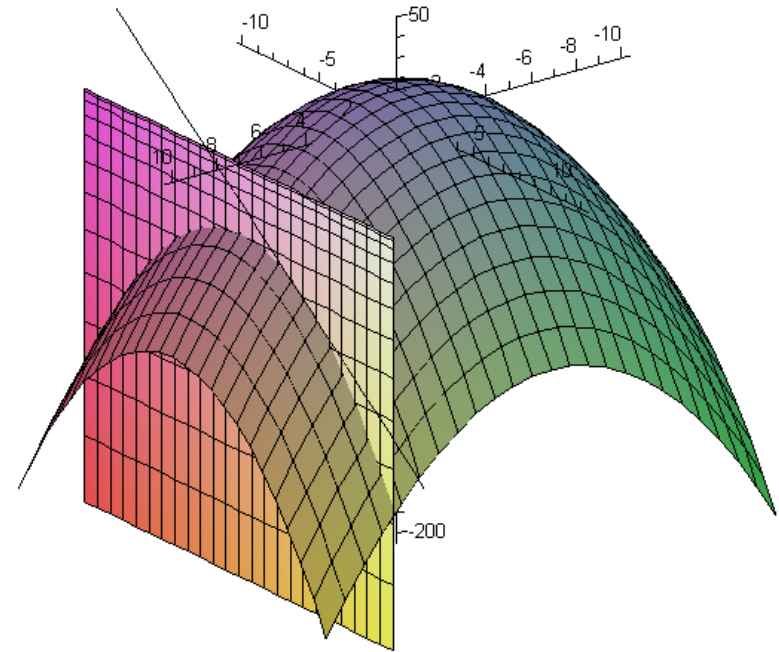
iii) $f_y(4, 7) =$

What do these three numbers represent?

The plane $y = 4$ intersecting the surface $z = 15 - x^2 - y^2$.



The plane $x = 7$ intersecting the surface $z = 15 - x^2 - y^2$.



Second Partial Derivatives

Concavity in x-direction:

$$\frac{\partial^2 z}{\partial x^2} = \frac{\partial}{\partial x} \left(\frac{\partial z}{\partial x} \right) = f_{xx}(x, y)$$

Concavity in y-direction:

$$\frac{\partial^2 z}{\partial y^2} = \frac{\partial}{\partial y} \left(\frac{\partial z}{\partial y} \right) = f_{yy}(x, y)$$

Mixed Partials:

$$\frac{\partial^2 z}{\partial y \partial x} = \frac{\partial}{\partial y} \left(\frac{\partial z}{\partial x} \right) = f_{xy}(x, y)$$

$$\frac{\partial^2 z}{\partial x \partial y} = \frac{\partial}{\partial x} \left(\frac{\partial z}{\partial y} \right) = f_{yx}(x, y)$$

Example: Find all second partials for

$$z = f(x, y) = x^4 + 3x^2y^3 + y^5$$